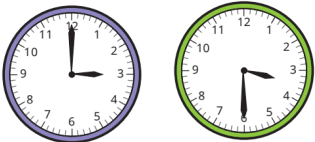








Step	Year 2 Summer Term Block 2 - Small Steps - Time	
	Learning Intention	Vocabulary / Questions / Stem Sentences
1	o'clock and half past  To tell the time to the hour and half past the hour.	Which is the hour hand? Which is the minute hand? <ul style="list-style-type: none"> When the minute hand points at (12/6), _____ it means that the time is (o'clock/half past). The time is _____ o'clock The time is half past _____
2	Quarter past and quarter to  To tell the time to quarter past and quarter to the hour.	How many quarters are there in one whole? How could you show a quarter on a clock? <ul style="list-style-type: none"> The time shown is quarter past/to _____ At quarter past/to _____, the minute hand is pointing to _____ and the hour hand is between the _____ and _____
3	Tell time past the hour  To tell the time to 5 minutes past the hour.	How many minutes are there in an hour? How many numbers are shown on the clock? How many minutes are there between each number shown on the clock? How do you know? <ul style="list-style-type: none"> When the minute hand is pointing to _____, it is _____ minutes past the hour. The time shown is _____ minutes past _____
4	Tell time to the hour  To tell the time to 5 minutes past the hour.	When in an hour do you stop saying "past" and start saying "to"? How can you tell by looking at a clock if the time is past or to the hour? <ul style="list-style-type: none"> The time is minutes to _____ At _____ minutes to _____, the hour hand is between _____ and _____ and the minute hand is pointing to _____
5	Tell the time to 5 minutes  To tell the time to 5 minutes to the hour.	How many minutes are there between each pair of numbers on a clock? How many minutes past/to the hour is it if the minute hand is pointing to ? <ul style="list-style-type: none"> When the minute hand is pointing to _____, the time is _____ minutes past/to the hour. At _____ minutes past/to _____, the minute hand is pointing to _____ and the hour hand is between _____ and _____
6	Minutes in an hour 60 minutes  To know, use and apply the fact there are 60 minutes in 1 hour.	How many minutes are there in an hour? <ul style="list-style-type: none"> There are _____ minutes in 1 hour. There are _____ minutes in quarter/half/three-quarters of an hour. There are _____ minutes in 1 hour and _____ minutes.
7	Hours in a day  To know there are 24 hours in a day and solve problems relating to time.	How many hours are there in a day? What time will it be in one hour? <ul style="list-style-type: none"> There are _____ hours in a day. Each time on a clock happens _____ times every day. A new day starts at 12 _____
	End of unit assessment	